


WHAT SHOULD DANNY DO? ON VACATION!

ENDING MAP

As you read, check off each ending you find. Find all 9 endings.

___ pg 5 >>> pg 20 >>> pg 6 >>> pg 70 >>> pg 80 >>>

___ (alt.) pg 5 >>> pg 20 >>> pg 6 >>> pg 70 >>> pg 86 >>> pg 84 >>>



___ pg 5 >>> pg 12 >>> pg 44 >>> pg 34 >>> pg 60 >>>




___ pg 5 >>> pg 20 >>> pg 90 >>> pg 50 >>>

___ (alt.) pg 5 >>> pg 20 >>> pg 6 >>> pg 68 >>> pg 92 >>> pg 50 >>>




___ pg 5 >>> pg 12 >>> pg 28 >>> pg 40 >>>



___ pg 5 >>> pg 12 >>> pg 44 >>> pg 34 >>> pg 66 >>>




___ pg 5 >>> pg 12 >>> pg 28 >>> pg 56 >>> pg 76 >>>



___ pg 5 >>> pg 12 >>> pg 28 >>> pg 56 >>> pg 88 >>>



___ pg 5 >>> pg 20 >>> pg 6 >>> pg 68 >>> pg 92 >>> pg 16 >>>



___ pg 5 >>> pg 12 >>> pg 44 >>> pg 18 >>>

